















NAME: _____





ACTIVITY WORKSHEET # 1 – GRADE LEVEL: K

Coin	Name of coin	How many pennies it is worth?
1¢	PENNY	1 cent
Front  Back 		
5¢	NICKEL	_____ cents
Front  Back 		
10¢	DIME	_____ cents
Front  Back 		
25¢	QUARTER	_____ cents
Front  Back 		
100¢	DOLLAR	_____ cents
Front  Back 		

ACTIVITY WORKSHEET # 2 – GRADE LEVEL: K
PAYING FOR YOUR TOYS

	<u>QUARTERS</u>	<u>DIMES</u>	<u>NICKELS</u>	<u>PENNIES</u>
				<input type="text"/>
			<input type="text"/>	<input type="text"/>
				<input type="text"/>
			<input type="text"/>	<input type="text"/>
			<input type="text"/>	<input type="text"/>
				<input type="text"/>
		<input type="text"/>		
			<input type="text"/>	
			<input type="text"/>	<input type="text"/>
				<input type="text"/>

PAYING FOR YOUR TOYS

	<u>QUARTERS</u>	<u>DIMES</u>	<u>NICKELS</u>	<u>PENNIES</u>
		<input type="text"/>		<input type="text"/>
			<input type="text"/>	<input type="text"/>
			<input type="text"/>	<input type="text"/>
				<input type="text"/>
		<input type="text"/>	<input type="text"/>	
		<input type="text"/>		<input type="text"/>
			<input type="text"/>	<input type="text"/>
			<input type="text"/>	<input type="text"/>
		<input type="text"/>	<input type="text"/>	<input type="text"/>
		<input type="text"/>		<input type="text"/>
			<input type="text"/>	<input type="text"/>
			<input type="text"/>	<input type="text"/>
	<input type="text"/>			
		<input type="text"/>	<input type="text"/>	
		<input type="text"/>	<input type="text"/>	
		Any other?		

ACTIVITY WORKSHEET # 3 – GRADE LEVEL: K

Break up the following numbers in UNITS, and TENS

Number	TENS	UNITS
12		
7		
17		
5		
19		
3		
0		
5		
18		
11		
10		
9		
18		
1		
14		
8		
4		
20		
5		
13		
9		
17		
0		
15		
6		

ACTIVITY WORKSHEET SCRIPT – GRADE LEVEL: K

PUSH THE GRADE-LEVEL-K BUTTON

Step	ACTION	QUESTION
1	Push button 1 and buy the baby bottle . The bottle should be the only item in the cart	How much does the baby bottle cost?
2	Click on the pennies needed to pay for the bottle (get the YES, YOU GOT IT! Cheer)	How many pennies were needed?
3	Add one penny than necessary	What happened?
4	Remove two pennies from the pile by clicking on them	What happened?
5	Add one penny again	What happened?
	Press the RESTART button to clear all the coins from the desk.	How much money is now on the desk?
6	Click on a nickel coin, to add it to “Your Money” on the desk	How much money is now on the desk? How much more money do we need to pay for the baby bottle ?
7	Click on the needed coin to complete your payment. (get the YES, YOU GOT IT! Cheer)	
8	Press the RESTART button to clear all the coins from the desk.	The desk should be clear of coins, and your money should read “ \$ 0.00 ”
9	Click on the baby bottle to return it back to the store shelf	Your shopping cart should now be clear again
10	Select now the red bear	How much does the red bear cost?
11	Click to add all the pennies needed to pay for the red bear . (get the YES! Cheer)	How many pennies were needed?
12	Press the RESTART button to clear all the coins from the desk.	The desk should be clear, and your money should read “ \$ 0.00 ”
13	Now click on one nickel to add it to “Your Money”	How much money is now on the desk? To complete the money you need to buy the red bear , how many more pennies will be needed?
14	Click on the extra pennies needed to complete the payment for the red bear	How many more pennies were needed?

15	Press the RESTART button to clear all the coins from the desk.	The desk should be clear, and your money should read “\$ 0.00”
16	Click on the red bear to return it back to the store shelf	Your shopping cart should now be clear again
17	Get the red car into your shopping cart	How much does the red car cost?
18	Click to add all the pennies needed to pay for the red car . (get the YES! Cheer)	How many pennies were needed?
19	Press the RESTART button to clear all the coins from the desk.	The desk should be clear, and “your money should read “\$ 0.00”
20	Now click on one nickel to add it to “Your Money”	How much money is now on the desk? To complete the money you need to buy the red car , how many more pennies are needed?
21	Click on the pennies needed to complete the payment for the red car (get the YES! Cheer)	How many pennies were needed?
22	Press the RESTART button to clear all the coins from the desk.	The desk should be clear, and your money should read “\$ 0.00”
23	Click on the red car to return it back to the store shelf	Your shopping cart should now be clear again
24	Get the green frog into your shopping cart	How much does the green frog cost?
25	Which coins, pennies, dimes, or nickles can be used to pay for the green frog ?	Penny ? YES / NO Dime ? YES / NO Nickel ? YES / NO
26	How many Pennies ?	_____
27	How many Dimes ?	_____
28	How many Nickels ?	_____

29

How many other ways
(combinations of coins) can
you think can be used to pay
for the **green frog**?

	<u>Pennies</u>	<u>Nickels</u>	<u>Dimes</u>	<u>Quarters</u>
1				
2				
3				
4				
5				
6				